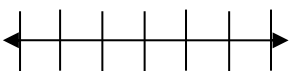
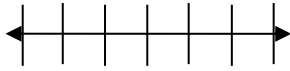
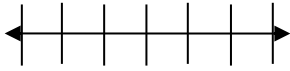


Name:

Weekly Math Homework - #6

Teacher:

Monday	Tuesday	Wednesday	Thursday
Find the sum.  $\begin{array}{r} 623,254 \\ + 376,746 \\ \hline \end{array}$	Find the difference.  $\begin{array}{r} 900,000 \\ - 424,723 \\ \hline \end{array}$	Find the product.  $\begin{array}{r} 98 \\ \times 25 \\ \hline \end{array}$	Find the quotient  $3264 \div 8$
Solve  $13 - -15$	Solve  $-12 \times -9$	Solve  $-14 \times 11$	Solve  $-142 + 121$
Solve  $\frac{1}{2} + \frac{4}{7}$	Solve  $\frac{7}{10} - \frac{1}{2}$	Solve  $\frac{3}{4} \times 6$	Solve  $\frac{1}{5} \div 3$
Solve for x  $23 + x = -6$	Solve for x  $x - 10 = -9$	Solve for x  $-11x = 132$	Solve for x  $\frac{x}{7} = -9$
Graph the inequality $x < -6$  	Graph the inequality $x \geq 5$  	<b>Write an inequality to describe the situation:</b> You must be at least 48 inches tall to ride the rollercoaster	Graph the inequality $2x \geq -24$  

# My Work

Monday	Tuesday
Wednesday	Thursday

# My Progress

MONDAY	TUESDAY	WEDNESDAY	THURSDAY
# of questions _____	# of questions _____	# of questions _____	# of questions _____
# correct _____	# correct _____	# correct _____	# correct _____
I need more help with... _____	I need more help with... _____	I need more help with... _____	I need more help with... _____
_____	_____	_____	_____
_____	_____	_____	_____
_____	_____	_____	_____
_____	_____	_____	_____
_____	_____	_____	_____